




Match each equation to answer and write the answer.

Answers

Ex) $\frac{1}{10} + \frac{1}{10} + \frac{1}{10} + \frac{1}{10}$



Ex. I

1) $\frac{1}{10} + \frac{1}{10} + \frac{1}{10} + \frac{1}{10}$



1. _____

2) $\frac{1}{8} + \frac{1}{8} + \frac{1}{8} + \frac{1}{8}$



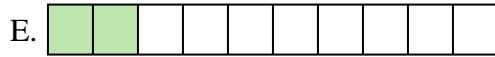
2. _____

3) $\frac{1}{10} + \frac{1}{10} + \frac{1}{10} + \frac{1}{10}$



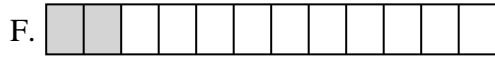
3. _____

4) $\frac{1}{10} + \frac{1}{10}$




4. _____

5) $\frac{1}{5} + \frac{1}{5} + \frac{1}{5}$




5. _____

6) $\frac{1}{12} + \frac{1}{12}$



6. _____

7) $\frac{1}{5} + \frac{1}{5} + \frac{1}{5}$



7. _____

8) $\frac{1}{8} + \frac{1}{8} + \frac{1}{8} + \frac{1}{8}$



8. _____

9) $\frac{1}{8} + \frac{1}{8} + \frac{1}{8} + \frac{1}{8}$



9. _____

10) $\frac{1}{12} + \frac{1}{12} + \frac{1}{12} + \frac{1}{12}$



10. _____

11) $\frac{1}{8} + \frac{1}{8} + \frac{1}{8} + \frac{1}{8}$




11. _____

12) $\frac{1}{3} + \frac{1}{3}$



12. _____

13) $\frac{1}{4} + \frac{1}{4}$



13. _____

14) $\frac{1}{8} + \frac{1}{8}$



14. _____

15) $\frac{1}{6} + \frac{1}{6} + \frac{1}{6} + \frac{1}{6} + \frac{1}{6}$




15. _____



Match each equation to answer and write the answer.


Ex) $\frac{1}{10} + \frac{1}{10} + \frac{1}{10} + \frac{1}{10}$



Answers

Ex. I

1) $\frac{1}{10} + \frac{1}{10} + \frac{1}{10} + \frac{1}{10}$




1. I

2) $\frac{1}{8} + \frac{1}{8} + \frac{1}{8} + \frac{1}{8}$




2. C

3) $\frac{1}{10} + \frac{1}{10} + \frac{1}{10} + \frac{1}{10}$



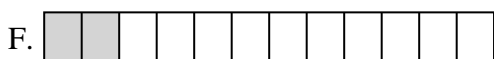
3. I

4) $\frac{1}{10} + \frac{1}{10}$



4. E

5) $\frac{1}{5} + \frac{1}{5} + \frac{1}{5}$




6. F

6) $\frac{1}{12} + \frac{1}{12}$



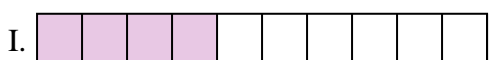
7. O

7) $\frac{1}{5} + \frac{1}{5} + \frac{1}{5}$



8. C

8) $\frac{1}{8} + \frac{1}{8} + \frac{1}{8} + \frac{1}{8}$



9. C

9) $\frac{1}{8} + \frac{1}{8} + \frac{1}{8} + \frac{1}{8}$



10. M

10) $\frac{1}{12} + \frac{1}{12} + \frac{1}{12} + \frac{1}{12}$



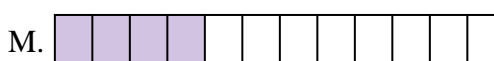
11. C

11) $\frac{1}{8} + \frac{1}{8} + \frac{1}{8} + \frac{1}{8}$



12. K

12) $\frac{1}{3} + \frac{1}{3}$




13. D

13) $\frac{1}{4} + \frac{1}{4}$



14. N

14) $\frac{1}{8} + \frac{1}{8}$



15. B

15) $\frac{1}{6} + \frac{1}{6} + \frac{1}{6} + \frac{1}{6} + \frac{1}{6}$

